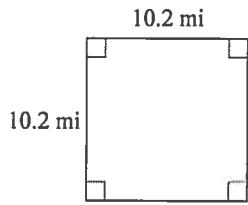


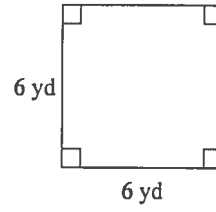
# Perimeter Worksheet

**Find the perimeter of each.**

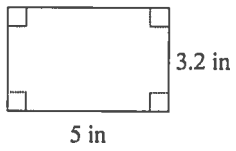
1)



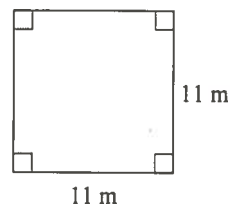
2)



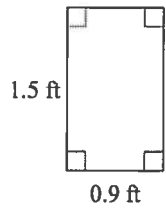
3)



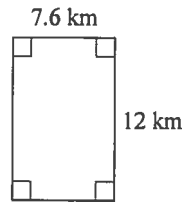
4)



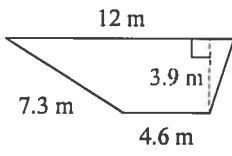
5)



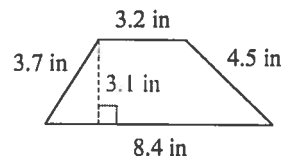
6)



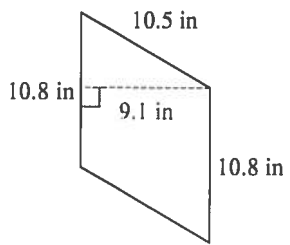
7)



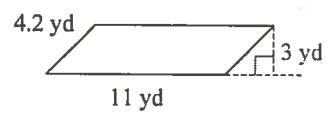
8)



9)

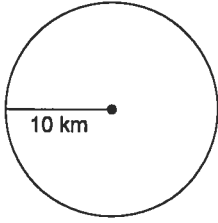


10)

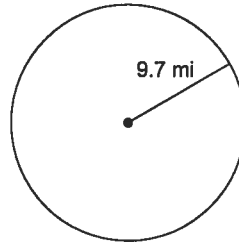


Find the circumference of each circle. Use your calculator's value of  $\pi$ . Round your answer to the nearest tenth.

11)



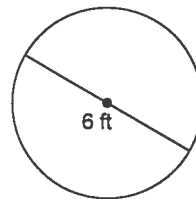
12)



13)



14)



## Answers to Perimeter Worksheet

1) 104.04 mi<sup>2</sup>

5) 1.35 ft<sup>2</sup>

9) 98.28 in<sup>2</sup>

13) 69.1 km

2) 36 yd<sup>2</sup>

6) 91.2 km<sup>2</sup>

10) 33 yd<sup>2</sup>

14) 18.8 ft

3) 16 in<sup>2</sup>

7) 32.37 m<sup>2</sup>

11) 62.8 km

4) 121 m<sup>2</sup>

8) 17.98 in<sup>2</sup>

12) 60.9 mi

1. 40.8 mi

5. 4.8 ft

9. 42.6 in

13. 69.1 km

2. 24 yd

6. 39.2 km

10. 30.4 yd

14. 18.8 ft

3. 16.4 in

7. 28.0 cm

11. 62.8 km

4. 44 m

8. 19.8 in

12. 60.9 mi